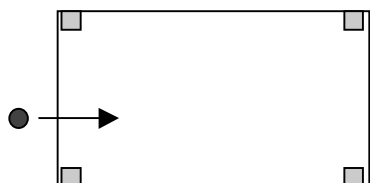
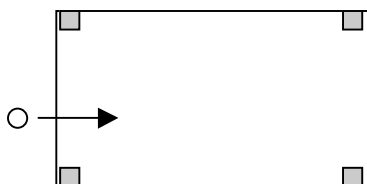


Invisible Investigations Student Worksheet

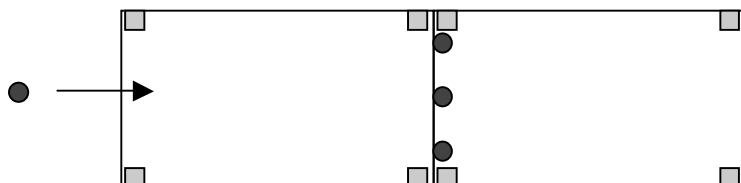
A. Magnetic marble observations: _____



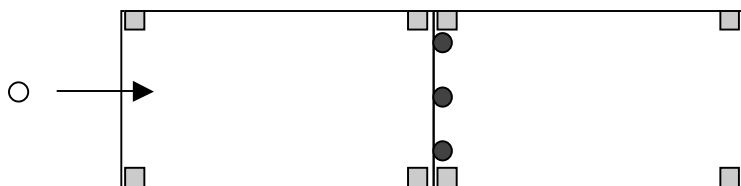
B. Nonmagnetic marble observations: _____



C. Two tables, magnetic marble observations: _____



D. Two tables, nonmagnetic marble observations: _____



E. Two tables, magnetic marble rolled and unknown table marbles observations:

